

# College Geometry

**George Voutsadakis<sup>1</sup>**

<sup>1</sup>Mathematics and Computer Science  
Lake Superior State University

LSSU Math 325

## 1 Triangles

- The Circumcircle
- The Centroid
- The Euler Line, Orthocenter and the Nine-Point Circle
- Computations
- The Incircle
- Exscribed Circles

## Subsection 1

## The Circumcircle

# Circumcircle, Circumcenter and Circumradius

- We showed that there exists a unique circle through any three noncollinear points.
- Each triangle, therefore, is inscribed in exactly one circle, called its **circumcircle**.
  - The center is called the **circumcenter**;
  - The radius is called the **circumradius**.

The usual notation is  $O$  for the circumcenter and  $R$  for the circumradius.

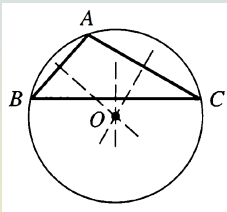
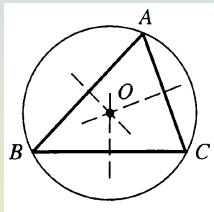
## Theorem

The three perpendicular bisectors of the sides of a triangle are concurrent at the circumcenter of the triangle.

- Given  $\triangle ABC$ , we know that its circumcenter  $O$  is equidistant from vertices  $A$  and  $B$ . So it lies on the perpendicular bisector of side  $AB$ . Similarly,  $O$  lies on the perpendicular bisectors of sides  $BC$  and  $AC$ .

# Relative Position of the Circumcenter

- There are at least two possibilities concerning the circumcenter:
  - It may be an interior point of  $\triangle ABC$ ;
  - It may be outside of the triangle.



On the left  $\angle A$  is acute while on the right it is obtuse.

- If  $\angle A = 90^\circ$ , then  $\widehat{BC}$  is a semicircle. So, the circumcenter  $O$  lies on the hypotenuse  $BC$ . Thus,  $BC$  is a diameter of the circumcircle.

We conclude that, for a right triangle, the circumcenter is the midpoint of the hypotenuse and the circumradius  $R = \frac{1}{2}BC$ .

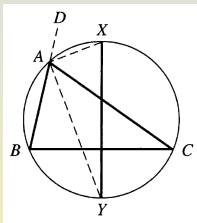
# Perpendicular Bisectors of Sides and Circumference

## Proposition

The perpendicular bisectors of the sides of a triangle meet the circumcircle at the interior and exterior angle bisectors.

- Consider the perpendicular bisector  $XY$  of side  $BC$  of  $\triangle ABC$ .

Since  $Y$  lies on the perpendicular bisector of  $BC$ ,  $Y$  is equidistant from  $B$  and  $C$ . Thus, chords  $BY$  and  $CY$  are equal. It follows that  $\widehat{BY} \cong \widehat{CY}$ , whence  $\angle BAY = \angle CAY$ . So  $Y$  is the point where the bisector of  $\angle A$  meets the circumcircle.



Extend  $AB$  to  $D$  and draw  $AX$ . We show that  $\angle DAX = \angle CAX$ . The circumcenter of  $\triangle ABC$  lies on the perpendicular bisector  $XY$  of  $BC$ . So  $XY$  is a diameter of the circle. It follows that  $\angle XAY = 90^\circ$ . Thus,  $\angle DAX = 180^\circ - \angle BAX = 180^\circ - (90^\circ + \angle BAY) = 90^\circ - \angle BAY = 90^\circ - \angle CAY = \angle XAY - \angle CAY = \angle CAX$ .

# Extended Law of Sines

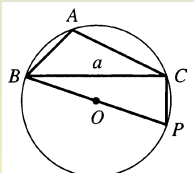
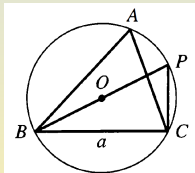
## Theorem (Extended Law of Sines)

Given  $\triangle ABC$  with circumradius  $R$ , write as usual  $a, b$  and  $c$  to denote the lengths of the sides opposite vertices  $A, B$  and  $C$ , respectively. Then

$$\frac{a}{\sin(A)} = \frac{b}{\sin(B)} = \frac{c}{\sin(C)} = 2R.$$

- We show  $\frac{a}{\sin(A)} = 2R$ .

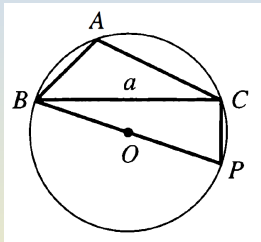
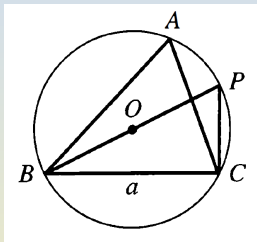
Draw the circumcircle of  $\triangle ABC$ .  
Let  $BP$  be the diameter through  $B$ .



There is also the possibility that  $P = C$ , which occurs if  $\angle A = 90^\circ$ .

- Suppose  $\angle A < 90^\circ$ .  $BP$  is a diameter. So  $\triangle PBC$  is a right triangle with hypotenuse  $BP$  of length  $2R$ . Thus,  $\sin(P) = \frac{BC}{BP} = \frac{a}{2R}$ . But  $\angle A = \angle P$  because they subtend the same arc. Hence,  $\sin(A) = \frac{a}{2R}$ .

# Extended Law of Sines (Cont'd)



- Suppose  $\angle A = 90^\circ$ . Then  $\triangle ABC$  is a right triangle and the hypotenuse  $BC$  is a diameter of the circumcircle. Thus  $a = BC = 2R$ . But  $\sin(A) = 1$ . So  $\frac{a}{\sin(A)} = a = 2R$ .
- Suppose  $\angle A > 90^\circ$ . Then  $\triangle PBC$  is a right triangle. So  $\sin(P) = \frac{a}{2R}$ . In this case,  $A$  and  $P$  are opposite vertices of an inscribed quadrilateral. Hence  $\angle A = 180^\circ - \angle P$ . It follows that  $\sin(A) = \sin(P)$ . Thus,  $\sin(A) = \frac{a}{2R}$ .



# Application of the Extended Law of Sines

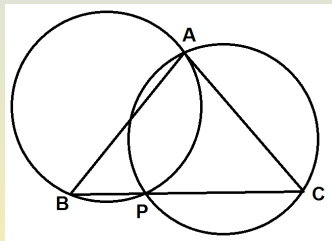
## Proposition

Given isosceles  $\triangle ABC$ , choose a point  $P$  on the base  $BC$ . Then  $\triangle ABP$  and  $\triangle ACP$  have equal circumradii.

- Apply the extended law of sines in  $\triangle ABP$ : The diameter of the circumcircle of  $\triangle ABP$  is  $\frac{AP}{\sin(B)}$ .

Apply the extended law of sines in  $\triangle ACP$ : The diameter of the circumcircle of  $\triangle ACP$  is  $\frac{AP}{\sin(C)}$ .

Since  $\triangle ABC$  is isosceles, by the pons asinorum,  $\angle B = \angle C$ . Thus,  $\sin(B) = \sin(C)$  and the two diameters are equal.



# Area, Circumradius and Sides

## Corollary

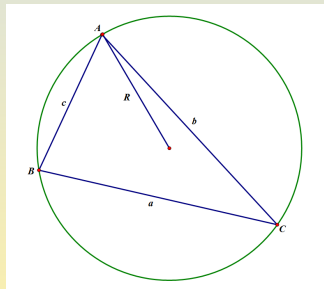
Let  $R$  and  $K$  denote the circumradius and area of  $\triangle ABC$ , respectively, and let  $a, b$  and  $c$  denote the side lengths. Then  $4KR = abc$ .

- We know  $2K = ab \sin(C)$ .

By the extended law of sines,

$$2R = \frac{c}{\sin(C)}.$$

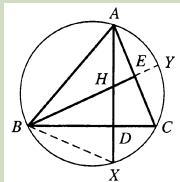
Thus,  $4KR = abc$ .



# Altitudes and Circumcircles

## Proposition

Given acute angled  $\triangle ABC$ , draw altitude  $AD$  and note that point  $D$  must lie on line segment  $BC$ . Extend  $AD$  beyond  $D$  to point  $X$  on the circumcircle. Observe that  $AD > DX$ , and thus there is a point  $H$  on segment  $AD$  for which  $HD = DX$ . Then line  $BH$  is perpendicular to  $AC$ .



- Since  $\angle B$  and  $\angle C$  are acute, point  $D$ , lies between  $B$  and  $C$ . To see that  $AD > DX$ , we consider  $BC$  and the perpendicular bisector of  $AX$ . These are parallel lines that cut  $AX$  at point  $D$  and at the midpoint of  $AX$ , respectively. So it is enough to show that  $BC$  is below the perpendicular bisector. But the perpendicular bisector of  $AX$  goes through the center of the circle. Thus, it suffices to observe that  $BC$  is below the center. This is true because  $\angle A$  is acute, and hence it subtends an arc that is less than a semicircle. We have now justified that  $H$  lies inside the triangle.

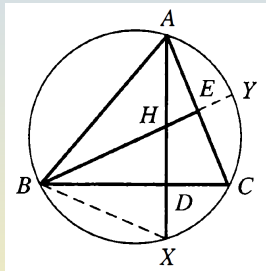
# Altitudes and Circumcircles (Cont'd)

- Let  $E$  and  $Y$  be the points where  $BH$  meets side  $AC$  and where it meets the circle, respectively.  $D$  is the midpoint of  $HX$ . So  $BC$  is the perpendicular bisector of  $HX$ . Thus  $BH = BX$ . Now  $BD$  is an altitude of isosceles  $\triangle HBX$ . So it is also an angle bisector. We conclude  $\angle YBC = \angle XBC$ . It follows that  $\widehat{YC} \cong \widehat{XC}$ .

Now we have

$$90^\circ = \angle ADB \cong \frac{1}{2}(\widehat{AB} + \widehat{XC}) \cong \frac{1}{2}(\widehat{AB} + \widehat{YC}) \cong \angle AEB.$$

Thus,  $\angle AEB$  is a right angle.



# The Orthocenter

- We showed that the altitude of  $\triangle ABC$  from vertex  $B$  crosses altitude  $AD$  at the specified point  $H$ .
- Similarly, the altitude from vertex  $C$  also crosses  $AD$  at this same point  $H$ .
- Thus, the three altitudes are concurrent.
- It is true for every triangle that the altitudes are concurrent at a point called the **orthocenter**, but we have so far proved this only in the case of acute angled triangles.
- A point  $Q$  is the **reflection** of a point  $P$  in a given line if the line is the perpendicular bisector of segment  $PQ$ .
- The preceding proposition also shows that the three points that result when the orthocenter of an acute angled triangle is reflected in the sides of the triangle all lie on the circumcircle.

# A Uniqueness Property of the Orthocenter

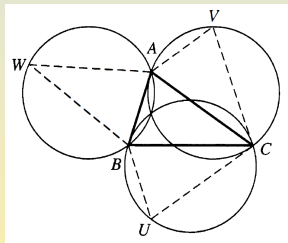
## Proposition

The only point whose reflections in the sides of the triangle all lie on the circumcircle is the orthocenter.

- Start with acute angled  $\triangle ABC$  and reflect each of the vertices  $A, B$  and  $C$  in the opposite side of the triangle to obtain points  $U, V$  and  $W$ , respectively.

Next, draw the circumcircles of  $\triangle BCU$ ,  $\triangle CAV$  and  $\triangle ABW$ . Observe that these appear to go through a common point. To understand what is going on here, note that  $\triangle UBC$  is the reflection of  $\triangle ABC$  in line  $BC$ .

Thus, the circumcircle of  $\triangle UBC$  is just the reflection of the circumcircle of  $\triangle ABC$  in this line.



## A Uniqueness Property of the Orthocenter (Cont'd)

- It follows that the circumcircle of  $\triangle UBC$  is the locus of all points whose reflection in line  $BC$  lies on the circumcircle of the original triangle. In particular, we know that the orthocenter  $H$  of  $\triangle ABC$  lies on this circle. By similar reasoning,  $H$  lies on each of the other two circles. Hence the three circles do indeed have a point in common. We know the orthocenter  $H$  lies on all three circles. Since these circles cannot have more than one common point,  $H$  is the only point all of whose reflections in the sides of  $\triangle ABC$  lie on the circumcircle of this triangle.
- The three circles through point  $H$  are clearly the circumcircles of  $\triangle HBC$ ,  $\triangle AHB$ , and  $\triangle ABH$ . Each of these circles is a reflection of the circumcircle of  $\triangle ABC$ . It follows that all four circumcircles have equal radii.

## Subsection 2

### The Centroid



# The Centroid

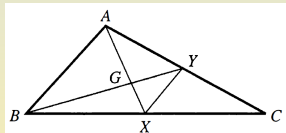
- In every triangle, the three medians are concurrent and the point of concurrence is called the **centroid** of the triangle, denoted  $G$ .

## Theorem

The three medians of an arbitrary triangle are concurrent at a point that lies two thirds of the way along each median from the vertex of the triangle toward the midpoint of the opposite side.

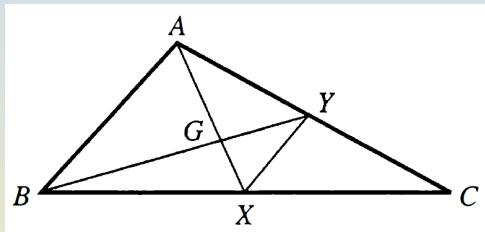
- Let  $G$  be the point where median  $AX$  crosses median  $BY$ .

We first show that  $G$  lies two thirds of the way from  $A$  to  $X$  along  $AX$ , i.e., that  $AG = 2GX$ . Draw segment  $XY$  that joins the midpoints of two sides of  $\triangle ABC$ .



We conclude that  $XY$  must be parallel to the third side,  $AB$ , and that  $XY = \frac{1}{2}AB$ . Since  $XY \parallel AB$ , we have equality of alternate interior angles, and thus  $\angle BAG = \angle YXG$  and  $\angle ABG = \angle XYG$ . It follows that  $\triangle BAG \sim \triangle YXG$  by AA, and, hence,  $\frac{AG}{GX} = \frac{AB}{XY} = 2$ .

# The Centroid (Cont'd)



- Similarly, median  $CZ$  crosses  $AX$  at a point that lies two thirds of the way from  $A$  to  $X$ . Since  $G$  is the only point on  $AX$  that has this property,  $CZ$  goes through  $G$ . So the three medians are concurrent, and we know that the point of concurrence lies two thirds of the way along median  $AX$ . By similar reasoning, we deduce that the point of concurrence lies two thirds of the way along each median.

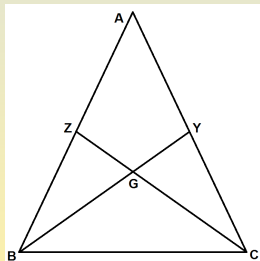
# Medians and Isosceles Triangles

## Proposition

Suppose that in  $\triangle ABC$ , medians  $BY$  and  $CZ$  have equal lengths. Then  $AB = AC$ .

- Medians  $BY$  and  $CZ$  intersect at the centroid  $G$ . By the Theorem,  $BG = \frac{2}{3}BY = \frac{2}{3}CZ = CG$ . Thus  $\triangle BGC$  is isosceles. By the pons asinorum,  $\angle GBC = \angle GCB$ .

We are given that  $BY = CZ$ , and of course,  $BC = BC$ . We now know that  $\angle YBC = \angle ZCB$ . By SAS,  $\triangle BYC \cong \triangle CZB$ . Thus,  $YC = ZB$ . We conclude that  $AB = 2ZB = 2YC = AC$ .



# The Medial Triangle

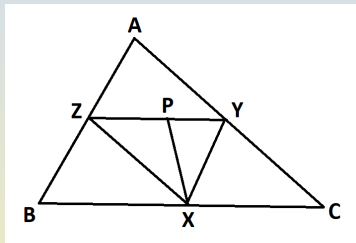
- Assume that the mass is uniformly distributed along the sides of  $\triangle ABC$  and that the interior is massless.

In this case, we can assume that:

- the total mass of side  $BC$  is  $a$  (the length of  $BC$ ), and we pretend that it is concentrated at the midpoint  $X$  of  $BC$ ;
  - a mass of  $b$  units is at the midpoint  $Y$  of  $AC$ ;
  - a mass of  $c$  units is at the midpoint  $Z$  of  $AB$ .
- We need to consider only  $\triangle XYZ$  with point masses  $a, b$  and  $c$  at vertices  $X, Y$  and  $Z$ .
  - $\triangle XYZ$ , the triangle formed by the midpoints of the sides of  $\triangle ABC$ , is called the **medial triangle** of  $\triangle ABC$ .
  - We know that  $XY = \frac{c}{2}$ ,  $XZ = \frac{b}{2}$  and  $YZ = \frac{a}{2}$ . By SSS,  $\triangle ABC \sim \triangle XYZ$ .

# Center of Mass of Wire Triangle is at the Incenter

- Replace the two point masses at  $Y$  and  $Z$  by a single mass at the center of mass  $P$  of side  $YZ$ . Since the masses at  $Y$  and  $Z$  are  $b$  and  $c$ , not necessarily equal,  $P$  need not be the midpoint of  $YZ$ .



Let  $YP = u$  and  $ZP = v$ . Then  $bu = cv$ . Hence  $\frac{u}{v} = \frac{c}{b} = \frac{XY}{XZ}$ . So  $P$  divides side  $YZ$  of  $\triangle XYZ$  into two pieces whose lengths are in the same ratio as the lengths of the nearer sides of the triangle. We conclude that the bisector of  $\angle X$  meets  $YZ$  at  $P$ . Thus the center of mass of  $\triangle XYZ$ , lies on the angle bisector  $XP$ .

## Center of Mass is at the Incenter (Cont'd)

- Similarly, it also lies on the other two angle bisectors of  $\triangle XYZ$ . So the center of mass of  $\triangle ABC$  lies at the point of concurrence of the angle bisectors of  $\triangle XYZ$ .
- In general, the angle bisectors of an arbitrary triangle are concurrent at a point called the **incenter**.
- In general, it is not true that the incenter of the medial triangle is the centroid of the original triangle.

In other words, the center of mass of a uniform wire triangle is not always at the same location as the center of mass of the corresponding uniform cardboard triangle.

## Subsection 3

# The Euler Line, Orthocenter and the Nine-Point Circle

# Circumcenter and Centroid

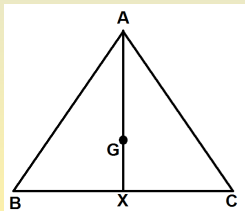
- If a given triangle is equilateral, then each median is the perpendicular bisector of the opposite side. So the circumcenter and the centroid are actually the same point.

## Lemma

If the circumcenter and the centroid of a triangle coincide, then the triangle must be equilateral.

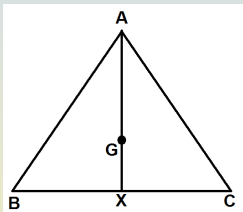
- Suppose that the centroid of  $\triangle ABC$  is also the circumcenter.

Let  $G$  be the centroid and let  $X$  be the midpoint of side  $BC$ . Then  $X$ ,  $G$  and  $A$  are distinct points on the median from  $A$ . Since these points are collinear,  $A$  lies on line  $GX$ . But  $G$  is also the circumcenter, and so it lies on the perpendicular bisector of side  $BC$ .





# Circumcenter and Centroid (Cont'd)



The midpoint  $X$  of side  $BC$  also lies on the perpendicular bisector of  $BC$ . It follows that the line  $GX$  is the perpendicular bisector of  $BC$ . Since  $A$  lies on  $GX$ , we have shown that  $A$  lies on the perpendicular bisector of  $BC$ .

Thus,  $A$  is equidistant from  $B$  and  $C$ . We now have  $AB = AC$ .

Similar reasoning shows that  $BA = BC$ .

Therefore, all three sides of  $\triangle ABC$  are equal and the triangle is equilateral.

# The Euler Line and the Orthocenter

- Given any non equilateral  $\triangle ABC$ :
  - The circumcenter  $O$  and the centroid  $G$  are two distinct points.
  - These two points determine a unique line that is called the **Euler line** of the triangle.
  - The three altitudes of a triangle are always concurrent at a point called the **orthocenter** of the triangle.
  - We will show that the Euler line also goes through the orthocenter.
- For equilateral triangles, there is no Euler line defined.
  - In this case, the altitudes are the medians, and we know that they are concurrent at the centroid.
  - Since there is no Euler line for an equilateral triangle, there is nothing to prove in this case.

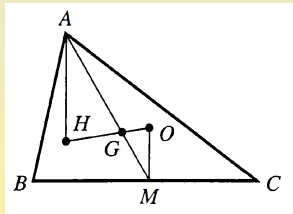
# Euler Line Contains the Orthocenter

## Theorem

Assume that  $\triangle ABC$  is not equilateral and let  $G$  and  $O$  be its centroid and circumcenter, respectively. Let  $H$  be the point on the Euler line  $GO$  that lies on the opposite side of  $G$  from  $O$  and such that  $HG = 2GO$ . Then all three altitudes of  $\triangle ABC$  pass through  $H$ .

- We show that the altitude from  $A$  passes through  $H$ . If  $H$  coincides with  $A$ , there is nothing to prove. So assume that  $H$  and  $A$  are different. ( $H$  and  $A$  coincide when  $\angle A = 90^\circ$ .) It suffices to show that line  $AH$  is perpendicular to  $BC$ .

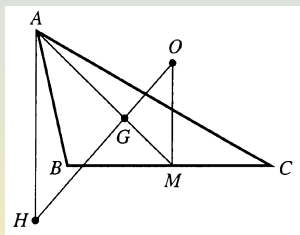
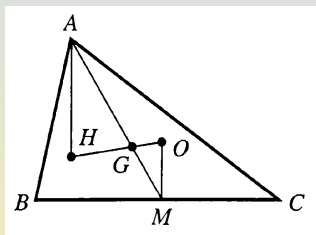
Let  $M$  be the midpoint of side  $BC$  and observe that  $O$  and  $M$  are distinct points. Otherwise, the median  $GM$  is the Euler line. Since  $AG = 2GM$ , it would follow that  $A$  is  $H$ , which we are assuming is not the case.



# Euler Line Contains the Orthocenter (Cont'd)

- Since both  $O$  and  $M$  lie on the perpendicular bisector of  $BC$ , line  $OM$  is perpendicular to  $BC$ .

We will be done if we can show that  $OM$  is parallel to  $AH$ .



We prove the equality of the alternate interior angles,  $\angle H$  and  $\angle O$ .

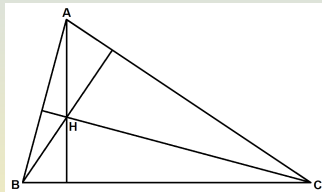
We know that  $\frac{AG}{MG} = 2$  and that  $\frac{HG}{OG} = 2$ , by the construction of the point  $H$ . Since  $\frac{AG}{MG} = \frac{HG}{OG}$  and  $\angle AGH = \angle MGO$ , we see that  $\triangle AGH \sim \triangle MGO$  by SAS. It follows that  $\angle H = \angle O$ .

# The Three Vertices and the Orthocenter

- Given  $\triangle ABC$ , let  $H$  be its orthocenter. If we start with a right triangle, then clearly  $H$  coincides with the right angle. In all other cases,  $A, B, C$  and  $H$  are easily seen to be four distinct points.

Observe that the line determined by any two of these four points is perpendicular to the line determined by the other two.

- For example,  $AH$  is perpendicular to  $BC$  because line  $AH$  is the altitude from  $A$  in  $\triangle ABC$ .
- We observe that each of the four points  $A, B, C$  and  $H$  is the orthocenter of the triangle formed by the other three.
  - That  $A$  is the orthocenter of  $\triangle HBC$ , for example, is just another way of saying that  $AH, AB$  and  $AC$  are perpendicular to  $BC, HC$  and  $HB$ , respectively.



# Orthic Quadruples

- Given any four points with the property that each is the orthocenter of the triangle formed by the other three, we say that the given set of four points is an **orthic quadruple**.
- Given an arbitrary set of three points  $A, B$  and  $C$ , there almost always exists a fourth point  $H$ , such that the set  $\{A, B, C, H\}$  is an orthic quadruple (take  $H$  to be the orthocenter of  $\triangle ABC$ ).

The only exceptions are:

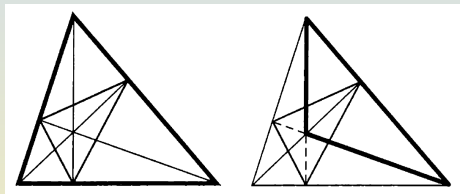
- when  $\triangle ABC$  is a right triangle;
- when  $\triangle ABC$  does not exist because the given three points are collinear.

# Pedal or Orthic Triangle

- Given  $\triangle ABC$ , let  $D, E$  and  $F$  be the points where the altitudes from  $A, B$  and  $C$  meet lines  $BC, AC$  and  $AB$ , respectively.
- These points are called the **feet** of the altitudes, and they may not actually lie on the line segments  $BC, AC$  and  $AB$ .
- If  $\triangle ABC$  is not a right triangle, it is not hard to see that the feet  $D, E$  and  $F$  are distinct and form a triangle.
- We refer to  $\triangle DEF$  as the **pedal** or **orthic triangle** of  $\triangle ABC$ .

# The Pedal Triangle

- With regards to pedal triangles two of the situations that can occur are shown below:

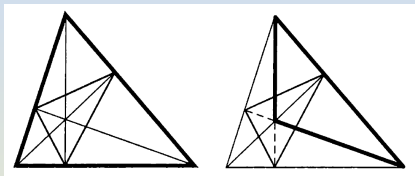


- The original triangle is drawn with heavy lines.
- The pedal triangle and the altitudes are drawn with solid lighter lines.
- The feet of the altitudes lie on the sides of the triangle for acute angled triangles, but two of the feet lie outside of the triangle if there is an obtuse angle.



## Pedal Triangles of Triplets in Orthic Quadruples

- The triangle on the left and the one on the right happen to be two of the four triangles that can be formed using three of the four points of an orthic quadruple.



We see that in both cases, we get exactly the same pedal triangle.

### Theorem

The pedal triangles of each of the four triangles determined by an orthic quadruple are all the same.

- For each choice of two of our four given points, the line determined by those two is perpendicular to the line determined by the other two. Since there are exactly three ways to pair off four objects into two sets of two, this gives three points that occur as the intersections of pairs of perpendicular lines determined by our orthic quadruple. These must be the vertices of the pedal triangle of each of the four triangles.

# The Euler Points of a Triangle

- The circumcircle of the pedal triangle of  $\triangle ABC$ , in addition to the feet of the three altitudes, also contains the midpoints of the three sides.
- Hence it is also the circumcircle of the medial triangle of  $\triangle ABC$ .
- The circle has the additional property that it bisects each of the line segments  $AH, BH$  and  $CH$ , where  $H$  is the orthocenter of  $\triangle ABC$ .
- The midpoint  $X$  of segment  $AH$  is called the **Euler point** of  $\triangle ABC$  opposite to side  $BC$ .

Similarly, the midpoints  $Y$  and  $Z$  of  $BH$  and  $CH$  are the **Euler points** of  $\triangle ABC$  opposite to sides  $AC$  and  $AB$ , respectively.

- The common circumcircle of the pedal and medial triangles contains the three Euler points and more!

# The Nine-Point Circle Theorem

## Theorem

Given any triangle, all of the following points lie on a common circle:

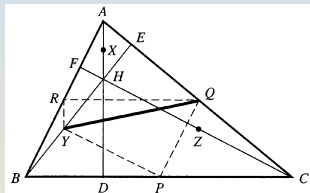
- the three feet of the altitudes;
- the three midpoints of the sides;
- the three Euler points.

Furthermore, each of the line segments joining an Euler point to the midpoint of the opposite side is a diameter of this circle.

- This remarkable circle is called the **nine-point circle** of the triangle. However, the nine points referred to in the statement of the theorem are not always distinct.
- Points  $D, E$  and  $F$  are the feet of the altitudes of  $\triangle ABC$ . Points  $P, Q$  and  $R$  are the midpoints of the sides and  $X, Y$  and  $Z$  are the Euler points. We need to show that all nine of these points lie on a common circle and that  $XP, YQ$  and  $ZR$  are diameters of this circle.

# The Proof of the Nine-Point Circle Theorem

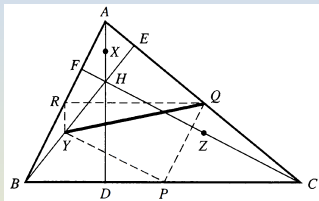
- Draw line segment  $YQ$  and consider the unique circle that has  $YQ$  as a diameter. We show that points  $P$  and  $R$  lie on this circle. To see that  $P$  lies on the circle with diameter  $YQ$ , it suffices to show that  $\angle YPQ = 90^\circ$ . We will do this by proving that  $YP \parallel CF$  and  $PQ \parallel AB$ . Since  $CF$  and  $AB$  are perpendicular, it follows that  $YP$  and  $PQ$  are perpendicular. Thus  $\angle YPQ = 90^\circ$ , as required. That  $PQ$  is parallel to  $AB$  follows since  $P$  and  $Q$  are the midpoints of two sides of  $\triangle ABC$  and  $AB$  is the third side. Similarly, to prove that  $YP$  is parallel to  $CF$ , we work in  $\triangle BHC$ .  $P$  is the midpoint of side  $BC$ . The Euler point  $Y$  is the midpoint of side  $BH$ . It follows that  $YP$  is parallel to the third side of this triangle, which is  $CH$ . Thus  $YP \parallel CF$ , as desired. We have shown that  $\angle YPQ = 90^\circ$ . Thus, point  $P$  lies on the circle with diameter  $YQ$ .



# Proof of the Nine-Point Circle Theorem (Cont'd)

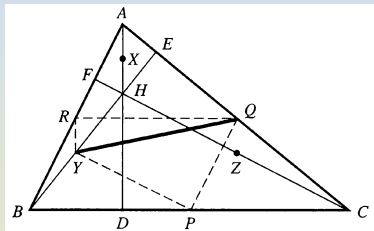
- We use similar reasoning to show that  $R$  lies on this circle. It suffices to prove that  $\angle YRQ = 90^\circ$ . We accomplish this by showing that  $YR \parallel AD$  and  $QR \parallel BC$ . Since altitude  $AD$  is perpendicular to side  $BC$ , it will follow that  $QR$  is perpendicular to  $YR$ . That  $QR \parallel BC$  follows by considering midpoints of sides in  $\triangle ABC$ . To prove that  $YR \parallel AD$ , we consider  $\triangle ABH$ .
- We have shown that points  $P, Q, R$  and  $Y$  all lie on the same circle and that  $YQ$  is a diameter of this circle.

Since this circle contains  $P, Q$  and  $R$ , it is, of course, the circumcircle of the medial triangle of  $\triangle ABC$ .
- We conclude that given an arbitrary  $\triangle ABC$ , the circumcircle of its medial triangle has line segment  $QY$  as a diameter, where  $Q$  is the midpoint of side  $AC$  and  $Y$  is the opposite Euler point.



# Concluding the Proof of the Nine-Point Circle Theorem

- It follows similarly that the line segments  $PX$  and  $RZ$  are also diameters of the medial circumcircle. In particular, the other two Euler points,  $X$  and  $Z$ , lie on this circle.



Hence, six of the required nine points lie on the medial circumcircle and each of  $XP$ ,  $YQ$  and  $ZR$  is a diameter.

We observe that  $E$  lies on the circle with diameter  $YQ$  since  $\angle YEQ = 90^\circ$ . This shows that the altitude foot  $E$  lies on the medial circumcircle of an arbitrary  $\triangle ABC$ .

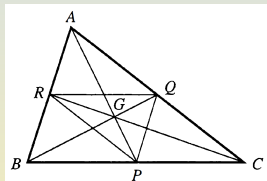
It follows similarly that the medial circumcircle contains the other two altitude feet,  $D$  and  $F$ .

# Radius of the Nine-Point Circle

## Proposition

Let  $R$  be the circumradius of  $\triangle ABC$ . Then the distance from each Euler point of  $\triangle ABC$  to the midpoint of the opposite side is  $R$ , and the radius of the nine-point circle of  $\triangle ABC$  is  $\frac{R}{2}$ .

- Since the nine-point circle is, among other things, the circumcircle of the medial triangle of  $\triangle ABC$ , we can solve this problem by focusing attention on  $\triangle PQR$ , where  $P, Q$  and  $R$  are the midpoints of sides  $BC, AC$  and  $AB$ .

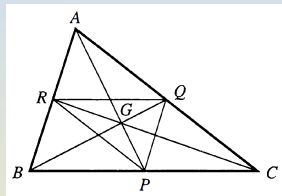


We know that  $QP \parallel AR$  and  $RP \parallel AQ$ . Thus  $AQPR$  is a parallelogram, and diagonal  $AP$  bisects diagonal  $RQ$ . In other words, median  $AP$  of  $\triangle ABC$  bisects side  $RQ$  of the medial triangle  $PQR$ . Hence, it contains the median from  $P$  in triangle  $PQR$ . Similarly, the other two medians of  $\triangle ABC$  contain the other medians of  $\triangle PQR$ . It follows that the centroid  $G$  of  $\triangle ABC$  is also the centroid of  $\triangle PQR$ .

# Radius of the Nine-Point Circle: A Plane Transformation

- Consider the following two-step transformation of the plane:

- First, shrink the plane with a scale factor  $\lambda = \frac{1}{2}$  in such a way that point  $G$  remains fixed and every other point moves toward  $G$ .
- Next, rotate the plane  $180^\circ$  with a center of rotation at  $G$ .



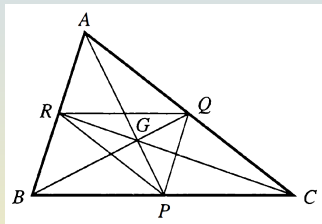
Let  $T$  denote the net effect of these two operations. Observe that  $T(A) = P$ , since  $AG = 2GP$  and  $\angle AGP = 180^\circ$ . Similarly,  $T(B) = Q$  and  $T(C) = R$ .

We argue informally that the transformation  $T$  carries lines to lines, triangles to triangles, and circles to circles. Furthermore, given a circle centered at some point  $O$ , the image of that circle under  $T$  is a circle centered at the point  $T(O)$  and having radius half that of the original circle.



# Radius of the Nine-Point Circle (Conclusion)

- Now consider the circumcircle of  $\triangle ABC$ , which is centered at the circumcenter  $O$  and has radius  $R$ . The transformation  $T$  carries  $\triangle ABC$  to  $\triangle PQR$ . Hence it carries the circumcircle of  $\triangle ABC$  to the circumcircle of  $\triangle PQR$ . The latter is the nine-point circle of  $\triangle ABC$ .



Thus, the center of the nine-point circle, which we call  $N$ , is exactly the point  $T(O)$ . Moreover, the radius of the nine-point circle is  $\frac{R}{2}$ . Also, since  $XP$ ,  $YQ$ , and  $ZR$  are diameters of the nine-point circle, it follows that each of these segments has length  $R$ .

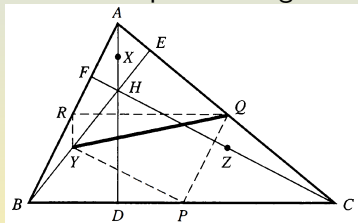
# Circumradii of Triangles Formed by Orthic Quadruple

## Corollary

Suppose  $\triangle ABC$  is not a right triangle and let  $H$  be its orthocenter. Then  $\triangle ABC$ ,  $\triangle HBC$ ,  $\triangle AHC$ , and  $\triangle ABH$  have equal circumradii.

- We know that these four triangles share a common pedal triangle.

Since the nine-point circle of any triangle is the circumcircle of its pedal triangle, it follows that the four triangles share a common nine-point circle.



We have just seen, however, that for an arbitrary triangle, the circumradius is exactly twice the nine-point radius. Hence, our four triangles have equal circumradii.

# The Center of the Nine-Point Circle

## Proposition

The center of the nine-point circle of  $\triangle ABC$  is the midpoint of the segment joining the orthocenter  $H$  and the circumcenter  $O$  of the  $\triangle ABC$ .

- Let  $N$  be the nine-point center of  $\triangle ABC$ .  $N$  must be the midpoint of each of the segments  $PX$ ,  $QY$  and  $RZ$ .
  - If  $\triangle ABC$  is equilateral,  $N$  coincides with  $G$  and  $O$  and  $H$ .
  - We assume, therefore, that the given triangle is not equilateral, whence it has an Euler line  $GO$ . We know that  $N = T(O)$ . It follows from the definition of  $T$  that  $N$  lies on the line through  $G$  and  $O$ , which is the Euler line. Furthermore,  $N$  lies on the opposite side of  $G$  from  $O$ , and we have  $NG = \frac{1}{2}GO$ . Recall now that the orthocenter  $H$  also lies on the Euler line on the opposite side of  $G$  from  $O$  and that  $HG = 2GO$ . It follows that  $N$  lies on the segment  $GH$  and  $HN = HG - NG = \frac{3}{2}GO$ . Also,  $NO = NG + GO = \frac{3}{2}GO$ . We deduce that  $HN = NO$ . In other words, the nine-point center  $N$  is the midpoint of the segment  $HO$ .

# The Center of the Nine-Point Circle

## Corollary

Suppose  $\triangle ABC$  is not a right triangle and let  $H$  be its orthocenter. Then the Euler lines of  $\triangle ABC$ ,  $\triangle HBC$ ,  $\triangle AHC$  and  $\triangle ABH$  are concurrent. If any of these triangles is equilateral, then the Euler lines of the remaining triangles are concurrent.

- These four triangles share a nine-point circle. The center  $N$  of this circle lies on all of the Euler lines, which are therefore concurrent.

## Subsection 4

# Computations

# The Law of Cosines

## Theorem (Law of Cosines)

Given  $\triangle ABC$ , let  $a, b$  and  $c$  denote, as usual, the lengths of sides  $BC, AC$  and  $AB$ , respectively. Then  $c^2 = a^2 + b^2 - 2ab\cos(C)$ .

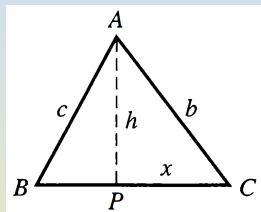
- Given  $a, b$  and  $c$ , the equation of the law of cosines can easily be solved to obtain  $\cos(C) = \frac{a^2 + b^2 - c^2}{2ab}$ .
- Similar formulas yield  $\cos(A)$  and  $\cos(B)$  in terms of  $a, b$  and  $c$ .
- Since a triangle can have at most one angle that fails to be acute, we can be sure that at least one of  $\angle A$  or  $\angle B$  is an acute angle. Assume that  $\angle B < 90^\circ$ . Draw altitude  $AP$  from  $A$  to  $BC$  and write  $h = AP$ . Note that there are three possibilities:
  - Either  $\angle C < 90^\circ$  and  $P$  lies on segment  $BC$  or
  - $\angle C = 90^\circ$  and point  $P$  coincides with point  $C$ , or
  - $\angle C > 90^\circ$  and  $P$  lies on an extension of side  $BC$ .

# The Law of Cosines (Cont'd)

- If  $\angle C < 90^\circ$  and we write  $x = PC$ ,

$\triangle APC$  is a right triangle. So  $\cos(C) = \frac{PC}{AC} = \frac{x}{b}$ . Thus,  $x = b\cos(C)$ . Two applications of the Pythagorean theorem yield  $b^2 = x^2 + h^2$  and  $c^2 = h^2 + (a-x)^2$ . This gives

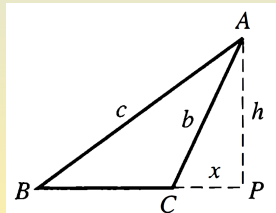
$c^2 = (b^2 - x^2) + (a-x)^2 = b^2 - x^2 + a^2 - 2ax + x^2 = a^2 + b^2 - 2ax$ . Since  $x = b\cos(C)$ , we obtain the desired formula.



- Assume that  $\angle C > 90^\circ$  and write  $x = PC$ .

We have  $\cos(C) = -\frac{x}{b}$  and  $x = -b\cos(C)$ . Two applications of the Pythagorean Theorem yield  $b^2 = x^2 + h^2$  and  $c^2 = h^2 + (a+x)^2$ . We have  $c^2 = (b^2 - x^2) + (a+x)^2 = b^2 - x^2 + a^2 + 2ax + x^2 = a^2 + b^2 + 2ax$ .

Since  $x = -b\cos(C)$  in this case, the proof is complete.



# Heron's Formula and Examples

- Define  $s = \frac{1}{2}(a + b + c)$ , called the **semiperimeter**.

## Theorem (Heron's Formula)

The area  $K$  of  $\triangle ABC$  is given by the equation

$$K = \sqrt{s(s-a)(s-b)(s-c)},$$

where  $a, b$  and  $c$  are the lengths of the sides and  $s$  is the semiperimeter.

- Note that if  $\triangle ABC$  is a right triangle with arms of length 3 and 4 and hypotenuse of length 5, we know that  $K = \frac{1}{2}bh = \frac{1}{2}(3)(4) = 6$ .  
On the other hand, we have  $s = \frac{1}{2}(3 + 4 + 5) = 6$ . So Heron's formula gives  $K = \sqrt{(6)(6-3)(6-4)(6-5)} = \sqrt{36} = 6$ .
- If  $\triangle ABC$  is an equilateral triangle, each of whose sides has length 2, we have  $K = \frac{1}{2}bh = \frac{1}{2}(2)(\sqrt{3}) = \sqrt{3}$ .  
Heron's formula gives  $K = \sqrt{(3)(3-2)(3-2)(3-2)} = \sqrt{3}$ .



# Proof of Heron's Formula

- We know that  $K = \frac{1}{2}ab\sin(C)$ . So  $4K^2 = a^2b^2\sin^2(C) = a^2b^2(1 - \cos^2(C))$ . The law of cosines gives  $\cos(C) = \frac{c^2 - a^2 - b^2}{2ab}$ . Substituting, we obtain

$$4K^2 = a^2b^2 \left( 1 - \frac{(c^2 - a^2 - b^2)^2}{4a^2b^2} \right) = a^2b^2 - \frac{(c^2 - a^2 - b^2)^2}{4}.$$

Thus  $16K^2 = 4a^2b^2 - (c^2 - a^2 - b^2)^2$ . The right side of this equation factors as a difference of squares to yield  $16K^2 = [2ab + (c^2 - a^2 - b^2)][2ab - (c^2 - a^2 - b^2)] = [c^2 - (a - b)^2][(a + b)^2 - c^2]$ . Each of the factors on the right of the previous equation factors as a difference of squares, and we obtain  $16K^2 = [c + (a - b)][c - (a - b)][(a + b) + c][(a + b) - c]$ . Observe that  $c + a - b = (a + b + c) - 2b = 2(s - b)$ . Similarly, the second factor in our formula for  $16K^2$  equals  $2(s - a)$ , and the third and fourth factors are  $2s$  and  $2(s - c)$ , respectively. It follows that  $K^2 = s(s - a)(s - b)(s - c)$ .

# Circumradius in terms of Lengths of Sides

## Proposition

The circumradius  $R$  of triangle  $\triangle ABC$  is given by

$$R = \frac{abc}{4\sqrt{s(s-a)(s-b)(s-c)}}.$$

- We know that  $4KR = abc$ . Thus,

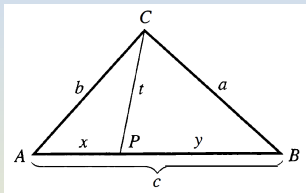
$$R = \frac{abc}{4K},$$

whence, by Heron's formula,

$$R = \frac{abc}{4\sqrt{s(s-a)(s-b)(s-c)}}.$$

# Stewart's Theorem

- Choose point  $P$  arbitrarily on side  $AB$  of  $\triangle ABC$ , dividing the side of length  $c$ , into pieces with lengths  $x$  and  $y$ . Let  $t$  be the length  $t = CP$ .



## Theorem (Stewart)

$$ct^2 + xyc = xa^2 + yb^2.$$

- By the law of cosines, we have  $t^2 = a^2 + y^2 - 2ay \cos(B)$  and  $b^2 = a^2 + c^2 - 2ac \cos(B)$ . We can eliminate  $\cos(B)$  if we multiply the first equation by  $c$  and the second by  $y$  and then subtract. Using the fact that  $c - y = x$ , we obtain

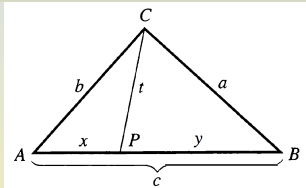
$$ct^2 - yb^2 = (c - y)a^2 + cy^2 - yc^2 = xa^2 + cy(y - c) = xa^2 - xyc.$$

# Lengths of Angle Bisectors

## Proposition

If  $CP$  is the angle bisector in  $\triangle ABC$  and  $t = CP$ , then  $t = \sqrt{ab \left[ 1 - \frac{c^2}{(a+b)^2} \right]}$ .

- Recall that bisector  $CP$  divides  $AB$  into pieces proportional to the lengths of the nearer sides, i.e.,  $\frac{x}{y} = \frac{b}{a}$ . Since  $x+y = c$ , a bit of algebra yields  $x = \frac{bc}{a+b}$  and  $y = \frac{ac}{a+b}$ .



To check the algebra, observe that the sum of these two fractions is  $c$  and that the first divided by the second is equal to  $\frac{b}{a}$ . It follows that  $xy = \frac{abc^2}{(a+b)^2}$  and  $xa^2 + yb^2 = \frac{a^2bc + b^2ac}{a+b} = abc$ . We can substitute into the Stewart's Theorem equation to get  $ct^2 + \frac{abc^3}{(a+b)^2} = abc$ . A little more algebra now yields  $t^2 = ab - \frac{abc^2}{(a+b)^2} = ab \left[ 1 - \frac{c^2}{(a+b)^2} \right]$ .

# Equality of Angle Bisectors

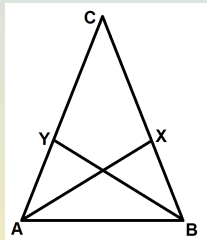
## Proposition

Let  $AX$  and  $BY$  be angle bisectors in  $\triangle ABC$  and suppose that  $AX = BY$ . Then  $AC = BC$ .

- We compute that  $(AX)^2 = bc\left[1 - \frac{a^2}{(b+c)^2}\right]$  and  $(BY)^2 = ac\left[1 - \frac{b^2}{(a+c)^2}\right]$ . By hypothesis, we know that these two quantities are equal. Divide by  $c$ :  $b\left[1 - \frac{a^2}{(b+c)^2}\right] = a\left[1 - \frac{b^2}{(a+c)^2}\right]$ . Therefore, we get  $b - a = \frac{ba^2}{(b+c)^2} - \frac{ab^2}{(a+c)^2}$ .

We need to show that  $a = b$ . Suppose that  $a$  and  $b$  are unequal, say  $b > a$ . Then, the left side of the previous equation is positive. Thus, the right side must also be positive. It follows that  $\frac{a}{(b+c)^2} > \frac{b}{(a+c)^2}$ .

But  $b > a$ , and so  $\frac{b}{(a+c)^2} > \frac{a}{(a+c)^2} > \frac{a}{(b+c)^2}$ . This contradicts the previous inequality.



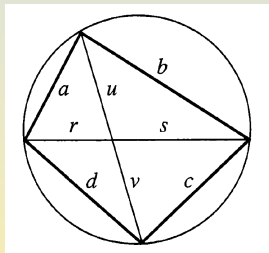
# Ptolemy's Theorem

## Theorem (Ptolemy)

Let  $a, b, c$  and  $d$  be the lengths of consecutive sides of a quadrilateral inscribed in a circle and suppose  $x$  and  $y$  are the lengths of the diagonals. Then  $ac + bd = xy$ .

- Let  $r, s, u$  and  $v$  be the lengths of the four partial diagonals, where  $r + s = x$  and  $u + v = y$ . It is easy to see from the two pairs of similar triangles that  $\frac{a}{c} = \frac{u}{s} = \frac{r}{v}$  and  $\frac{b}{d} = \frac{u}{r} = \frac{s}{v}$ . Thus, we get  $as = uc$ ,  $br = ud$  and  $uv = rs$ . It follows that  $sa^2 + rb^2 = uac + ubd = u(ac + bd)$  and  $xu^2 + xrs = xu^2 + xuv = xu(u + v) = xuy$ .

By Stewart's theorem, the quantities on the left sides of these equations are equal. Hence the right sides must also be equal. We conclude by canceling  $u$  that  $ac + bd = xy$ .



## Subsection 5

### The Incircle

# The Incircle of a Triangle

- A circle is said to be **inscribed** in a triangle if its center is interior to the triangle and all three sides of the triangle are tangent to the circle.
- Given an arbitrary triangle, we will show there must exist a unique inscribed circle, called the **incircle**.
  - Its center  $I$  is the **incenter**;
  - The length  $r$  of its radius is the **inradius**.
- Informally, to see why the incircle must exist:
  - Start with a small circle placed inside the triangle.
  - Let it grow continuously, keeping it inside the triangle by letting its center move freely as the circle grows.
  - Eventually, the circle will reach a maximum size, after which there is no room for further growth.
  - The max circle will be touching (that is, tangent to) all three sides.



# Locus Property of Angle Bisectors

## Lemma

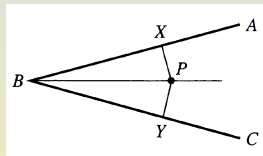
The bisector of  $\angle ABC$  is the locus of points  $P$  in the interior of the angle that are equidistant from the sides of the angle.

- If  $P$  is in the interior of  $\triangle ABC$ , drop perpendiculars  $PX$  and  $PY$  to lines  $AB$  and  $CB$ .

$P$  being equidistant from the sides of the angle is the same as saying that  $PX = PY$ . We must show that  $PX = PY$  if and only if  $P$  lies on the angle bisector.

Suppose that  $PX = PY$ .  $\triangle PXB$  and  $\triangle PYB$  are right triangles with right angles at  $X$  and  $Y$ . We have  $\triangle PXB \cong \triangle PYB$  by HA. It follows that  $\angle XBP = \angle YBP$ .

Conversely, suppose that  $P$  lies on the angle bisector, i.e.,  $\angle XBP = \angle YBP$ . Since  $\angle BXP = 90^\circ = \angle BYP$  and  $BP = BP$ ,  $\triangle PXB \cong \triangle PYB$  by SAA. We conclude that  $PX = PY$ .

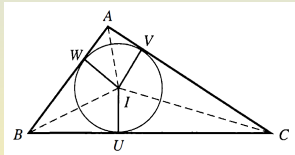


# Angle Bisectors and Incircle

## Theorem

The three angle bisectors of a triangle are concurrent at a point  $I$ , equidistant from the sides of the triangle. If we denote by  $r$  the distance from  $I$  to each of the sides, then the circle of radius  $r$  centered at  $I$  is the unique circle inscribed in the given triangle.

- Let  $\triangle ABC$  be the given triangle and let  $I$  be the point where the bisectors of  $\angle B$  and  $\angle C$  meet. From  $I$ , drop perpendiculars  $IU, IV$  and  $IW$  from  $I$  to sides  $BC, AC$  and  $AB$ , respectively.



By the lemma, we have  $IU = IW$  since  $I$  lies on the bisector of  $\angle B$ . Similarly, since  $I$  also lies on the bisector of  $\angle C$ , we see that  $IU = IV$ . We conclude that  $IW = IV$ . Thus point  $I$  must lie on the bisector of  $\angle A$ . Hence all three angle bisectors go through  $I$ .

# Angle Bisectors and Incircle

- We can now write  $r = IU = IV = IW$ , and we see that  $I$  is equidistant from sides  $BC, AC$  and  $AB$ . Point  $U$  lies on the circle of radius  $r$  centered at  $I$ . Since  $BC$  is a line through  $U$  perpendicular to radius  $IU$ , it follows that  $BC$  is tangent to this circle at  $U$ . Similarly,  $AC$  is tangent to this circle at point  $V$ , and  $AB$  is tangent at  $W$ .
- To see that this is the only circle inscribed in this triangle, suppose that we are given some inscribed circle. It suffices to show that its center is  $I$  and that its radius is  $r$ .
  - Let  $P$  be its center and  $X, Y$  and  $Z$  be the points of tangency of this circle with sides  $BC, AC$  and  $AB$ , respectively. Then radii  $PX$  and  $PY$  are perpendicular to sides  $BC$  and  $AC$ . Since  $PX = PY$ , we see that  $P$  must lie on the bisector of  $\angle C$ . Similarly,  $P$  lies on the bisector of  $\angle B$ , and we conclude that  $P$  is the point  $I$ .
  - It follows that each of  $PX$  and  $IU$  is a perpendicular drawn from this point to  $BC$ , and hence these are the same line segment. The radius  $PX$  of the unknown circle is thus equal to  $IU = r$ .

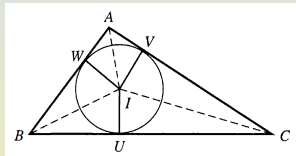
# Inradius and Area

## Proposition

Given a triangle with area  $K$ , semiperimeter  $s$ , and inradius  $r$ ,  $rs = K$ .

Therefore  $r = \sqrt{\frac{(s-a)(s-b)(s-c)}{s}}$ .

- We draw the incircle of  $\triangle ABC$  and the three radii  $IU$ ,  $IV$  and  $IW$  of length  $r$  joining the center  $I$  to the three points of tangency of the circle with the sides. These radii are thus perpendicular to the corresponding sides.



We also draw segments  $IA$ ,  $IB$  and  $IC$ , which bisect the angles of the triangle. Consider  $\triangle BIC$ . We have  $K_{IBC} = \frac{1}{2}(IU)(BC) = \frac{1}{2}ra$ . Similarly,  $K_{IAB} = \frac{1}{2}rc$  and  $K_{ICA} = \frac{1}{2}rb$ . Adding these, we get

$$K = K_{IBC} + K_{IAB} + K_{ICA} = \frac{1}{2}r(a + b + c) = rs.$$

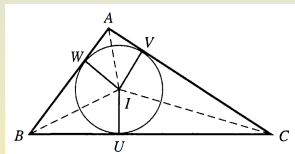
Since we know by Heron's formula,  $K = \sqrt{s(s-a)(s-b)(s-c)}$ , we deduce that  $r = \frac{K}{s} = \sqrt{\frac{(s-a)(s-b)(s-c)}{s}}$ .

# Incircle and Lengths of Side Segments

## Lemma

There is exactly one way to choose points  $U, V$  and  $W$  on sides  $BC, AC$  and  $AB$ , respectively, of  $\triangle ABC$  so that  $AV = AW$ ,  $BV = BU$  and  $CW = CU$ . The only points that satisfy these equations are the points where the sides of the triangle are tangent to the incircle. Furthermore, the distances  $AV$ ,  $BW$  and  $CU$  are equal to  $s - a$ ,  $s - b$  and  $s - c$ , respectively.

- The lengths of the two tangents to a circle from an exterior point are equal. So  $AV = AW$ . To see this directly, note that  $\triangle AVI \cong \triangle AWI$  by HA. Write  $x = AV = AW$ ,  $y = BU = BV$  and  $z = CW = CU$ .



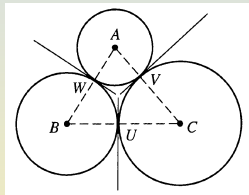
We have  $y + z = BC = a$ ,  $x + z = b$  and  $x + y = c$ . The first gives  $z = a - y$ . Substitute into the second  $x + a - y = b$ . Hence  $x - y = b - a$ . Since  $x + y = c$  from the third equation, we deduce that  $x = \frac{c + b - a}{2} = s - a$ . Similarly,  $y = s - b$  and  $z = s - c$ .

# Tangents to Externally Tangent Circles

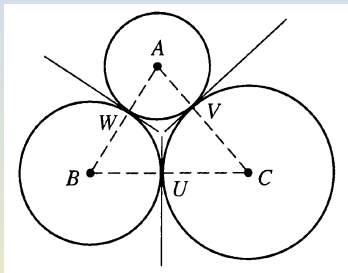
## Proposition

Given three pairwise mutually externally tangent circles, show that the three common tangent lines are concurrent.

- Let  $U$ ,  $V$  and  $W$  be the three points where two of the circles touch, and write  $A$ ,  $B$  and  $C$  to denote the centers of the three given circles. Observe that radius  $BU$  is perpendicular to the common tangent through  $U$  and that the same is true of radius  $CU$ . So  $\angle BUC = 180^\circ$ . Thus,  $U$  lies on the line segment  $BC$ . Similarly,  $V$  lies on  $AC$  and  $W$  lies on  $AB$ . We see now that  $U$ ,  $V$  and  $W$  are points on the sides of  $\triangle ABC$ , and we have  $AV = AW$  since these two segments are radii of the same circle. Similarly,  $BU = BW$  and  $CU = CV$ . Hence, points  $U$ ,  $V$  and  $W$  are the points of tangency of the incircle of  $\triangle ABC$  with the sides of the triangle.



# Tangents to Externally Tangent Circles (Cont'd)



- Points  $U$ ,  $V$  and  $W$  are the points of tangency of the incircle of  $\triangle ABC$  with the sides of the triangle. It follows that radius  $IU$  of the incircle is perpendicular to side  $BC$  at  $U$ . Since the common tangent line for the circles centered at  $B$  and  $C$  is perpendicular to  $BC$  at  $U$ , the tangent must be line  $IU$ . Similarly, the other two common tangent lines also go through the incenter  $I$  of  $\triangle ABC$ . Hence the three common tangents are concurrent at  $I$ .

# The Law of Tangents

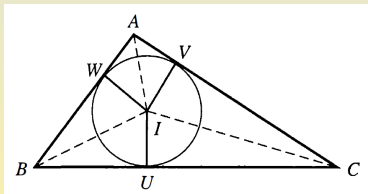
## Theorem (Law of Tangents)

In  $\triangle ABC$ , let the quantities  $a, b, c$  and  $s$  have their usual meanings. Then

$$\tan\left(\frac{C}{2}\right) = \sqrt{\frac{(s-a)(s-b)}{s(s-c)}}.$$

- Consider right  $\triangle CUI$ .

We know that  $\frac{UI}{UC}$  is the tangent of  $\angle UCI$ . Since  $CI$  bisects  $\angle C$  of the original triangle, this gives  $\tan\left(\frac{C}{2}\right) = \frac{UI}{UC} = \frac{r}{s-c}$ .



But we know that  $r = \sqrt{\frac{(s-a)(s-b)(s-c)}{s}}$ . The result follows.



# Coincidence of the Incenter and the Orthocenter

- In the case of an equilateral triangle, the circumcenter, the centroid, the orthocenter and the incenter coincide.
- Conversely, if any two of these points coincide, then the triangle must be equilateral:

## Proposition

Suppose that the incenter and the circumcenter of  $\triangle ABC$  are the same point. Then the triangle must be equilateral.

- Join  $O$  to vertices  $A$  and  $B$ . Note that  $\triangle OAB$  is isosceles since we know that  $OA = OB$ . By the pons asinorum, we have  $\angle OAB = \angle OBA$ .  $O$  is also the incenter. So  $OA$  and  $OB$  bisect angles  $A$  and  $B$ . We conclude that  $\angle A = 2\angle OAB$  and  $\angle B = 2\angle OBA$ . It follows that  $\angle A = \angle B$ . So by the converse of the pons asinorum, we see that  $CA = CB$ . Similarly, it follows that all of the sides are equal.

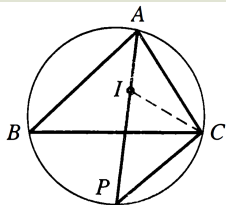
# Intersection Point of Angle Bisector and Circumcircle

## Lemma

Extend the bisector of one of the angles of a triangle to meet the circumcircle at point  $P$ . Then the distance from  $P$  to each of the other two vertices of the triangle is equal to the distance  $IP$ , where  $I$  is the incenter of the given triangle.

- Draw line  $AP$  bisecting  $\angle A$  of  $\triangle ABC$ .  $I$  lies on this line, and we must show  $IP = CP$ . It suffices to show that  $\angle ICP = \angle CIP$ . Since  $\angle BCP$  subtends the same arc as  $\angle BAP$ , we see that  $\angle BCP = \angle BAP = \frac{1}{2}\angle A$ . Also,  $IC$  bisects  $\angle C$  of the original triangle. Thus  $\angle ICB = \frac{1}{2}\angle C$ .

Hence  $\angle ICP = \frac{1}{2}(\angle A + \angle C)$ . To compute  $\angle CIP$ , we observe first that  $\angle P = \angle B$  since these subtend the same arc. Thus,  $\angle ICP + \angle CIP = 180^\circ - \angle P = 180^\circ - \angle B = \angle A + \angle C$ . Since  $\angle ICP = \frac{1}{2}(\angle A + \angle C)$ ,  $\angle CIP = \frac{1}{2}(\angle A + \angle C)$ .



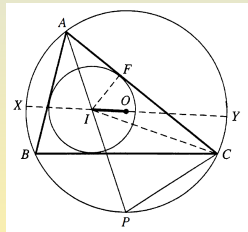
# Distance Between the Circumcenter and the Incenter

## Theorem (Euler)

Let  $d = OI$ , the distance from the circumcenter to the incenter of an arbitrary triangle. Then  $d^2 = R(R - 2r)$ , where  $R$  and  $r$  are the circumradius and inradius of the given triangle.

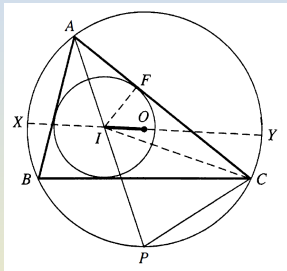
- We extend line segment  $OI$  to a diameter  $XY$  of the circumcircle.

Since  $OI = d$ ,  $XI = R - d$  and  $YI = R + d$ . Thus,  $XI \cdot YI = R^2 - d^2$ . We know that the product of the lengths of the two pieces of each chord through  $I$  is a constant, independent of the particular chord. It follows that  $R^2 - d^2 = XI \cdot YI = AI \cdot IP$ . Next, we try to compute the length  $IP$ , which we know is equal to  $PC$ .



# Proof of Euler's Theorem (Cont'd)

- We have  $R^2 - d^2 = XI \cdot YI = AI \cdot IP$ . We want to compute the length  $IP = PC$ :  
 We use the extended law of sines in  $\triangle APC$ .  
 Since  $\angle PAC = \frac{1}{2}\angle A$ , we have  $\frac{PC}{\sin(\frac{A}{2})} = 2R$ .  
 Hence



$$R^2 - d^2 = AI \cdot IP = AI \cdot PC = AI \cdot 2R \sin\left(\frac{A}{2}\right).$$

Finally, we compute  $AI \cdot \sin\left(\frac{A}{2}\right)$  by working in right  $\triangle AIF$ , where  $F$  is the point of tangency of the incircle with side  $AC$ . Since  $IF = r$ , we see that  $\sin\left(\frac{A}{2}\right) = \frac{r}{AI}$ . Thus,  $AI \cdot \sin\left(\frac{A}{2}\right) = r$ .

If we substitute this into our previous formula, we get  $R^2 - d^2 = 2rR$ .  
 So  $d^2 = R(R - 2r)$ .

# Comparing the Circumradius with the Inradius

## Corollary

For any triangle,  $R \geq 2r$  and equality holds if and only if the triangle is equilateral.

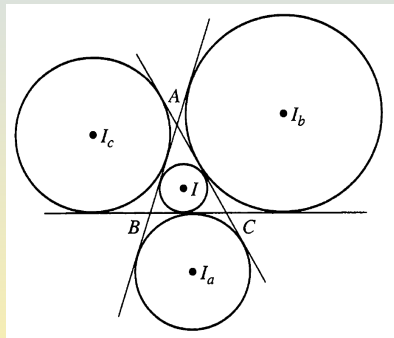
- Since  $d^2 = R(R - 2r)$ , we see that  $R - 2r$  can never be negative. Furthermore,  $R = 2r$  if and only if  $d = 0$ ; in other words,  $R = 2r$  if and only if points  $I$  and  $O$  are identical. But  $I$  and  $O$  coincide if and only if the triangle is equilateral.

## Subsection 6

### Exscribed Circles

# Excircles

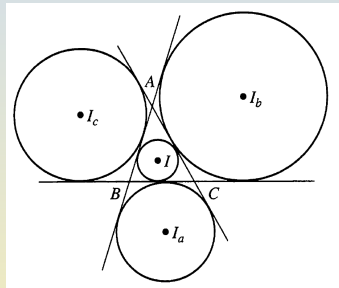
- The incircle of a triangle is sometimes referred to as a **tritangent circle** because it is tangent to all three sides of the triangle.
- If we are willing to consider circles tangent to extensions of the sides, a triangle also has three other tritangent circles.
- The three tritangent circles whose centers are exterior to the given triangle are called the **exscribed circles** or the **excircles** of the triangle.



# Excenters and Exradii

- The center of each of the exscribed circles lies at the intersection of three angle bisectors.

For example, the center of the excircle opposite vertex  $A$ , denoted  $I_a$ , lies at the point of concurrence of the bisector of  $\angle A$  and the bisectors of the exterior angles at points  $B$  and  $C$ .



- The centers of the excircles of  $\triangle ABC$  are the **excenters** of  $\triangle ABC$ .
- The corresponding radii are denoted  $r_a, r_b$  and  $r_c$ , and they are referred to as the **exradii** of the triangle.
- The three exradii, together with the inradius  $r$ , are collectively known as the **tritangent radii**.

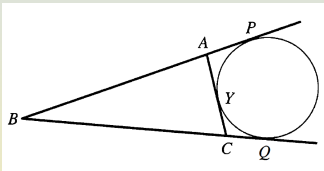


# Excenters and Exradii

## Lemma

The length of the tangent from a vertex of a triangle to the opposite exscribed circle is equal to the semiperimeter  $s$ .

- Let  $Y$ ,  $P$  and  $Q$  be the points of tangency, as shown. Since the two tangents to a circle from an exterior point are equal, we know that  $BP = BQ$ . We need to show that this common length is  $s$ .



Since  $AP = AY$ , we have  $BP = BA + AP = BA + AY$ .

Similarly,  $BQ = BC + CY$ .

Adding, we get  $BP + BQ = BA + AY + BC + CY = BA + BC + AC = 2s$ .

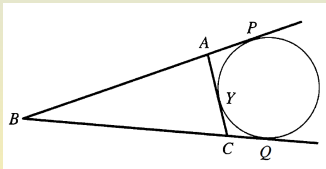
But  $BP = BQ$ , whence we get  $BP = BQ = s$ .

# Relation Between the Tritangent Radii

## Theorem

Given an arbitrary  $\triangle ABC$ , we have  $\frac{1}{r} = \frac{1}{r_a} + \frac{1}{r_b} + \frac{1}{r_c}$ .

- We have  $\frac{1}{r_a} + \frac{1}{r_b} + \frac{1}{r_c} = \sqrt{\frac{s-a}{s(s-b)(s-c)}} + \sqrt{\frac{s-b}{s(s-a)(s-c)}} + \sqrt{\frac{s-c}{s(s-a)(s-b)}} = \frac{(s-a)+(s-b)+(s-c)}{\sqrt{s(s-a)(s-b)(s-c)}} = \frac{s}{\sqrt{s(s-a)(s-b)(s-c)}} = \frac{s}{K} = \frac{1}{r}$ .
- Note that in the figure  $\triangle BPI_b$  is a right triangle with arm  $BP$  of length  $s$ . Since arm  $I_bP$  has length  $r_b$ , it follows that  $\tan\left(\frac{B}{2}\right) = \frac{r_b}{s}$ .



By the law of tangents, we obtain

$$r_b = s \cdot \tan\left(\frac{B}{2}\right) = s \sqrt{\frac{(s-a)(s-c)}{s(s-b)}} = \sqrt{\frac{s(s-a)(s-c)}{s-b}}$$