

# College Trigonometry

**George Voutsadakis<sup>1</sup>**

<sup>1</sup>Mathematics and Computer Science  
Lake Superior State University

LSSU Math 131

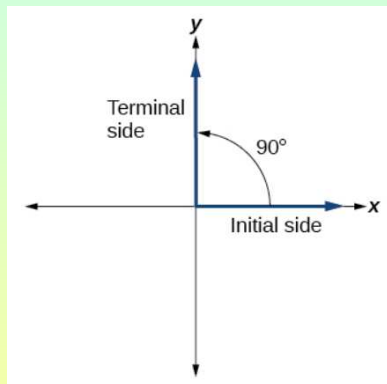
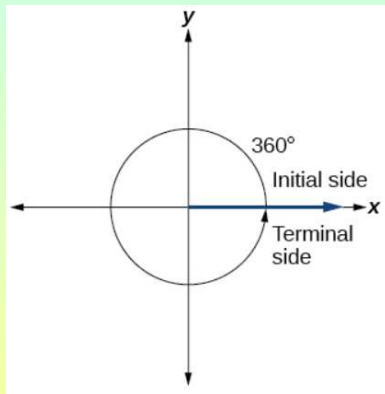
## 1 The Unit Circle: Sine and Cosine Functions

- Angles
- Right Triangle Trigonometry
- Unit Circle
- The Other Trigonometric Functions

## Subsection 1

### Angles

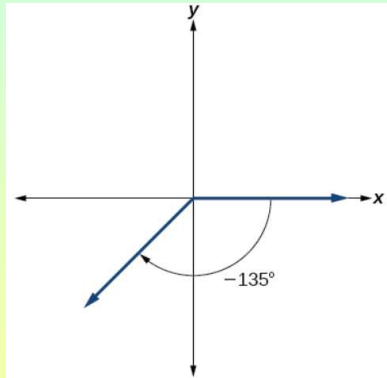
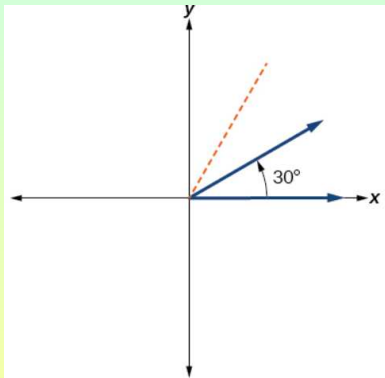
# Angles in Degrees in Standard Position



# Drawing an Angle in Standard Position

- Sketch an angle of  $30^\circ$  in standard position.

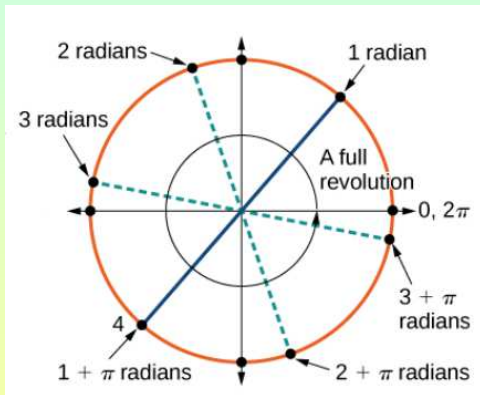
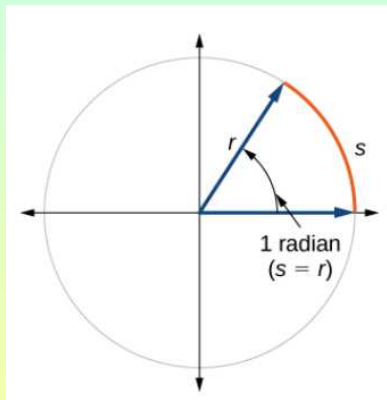
Note that  $30^\circ = \frac{1}{3}90^\circ$ .



- Sketch an angle of  $-135^\circ$  in standard position.

Note that  $-135^\circ = -90^\circ - 45^\circ$ .

# Angles in Radians in Standard Position



# Finding a Radian Measure

- Find the radian measure of one-third of a full rotation.  
A full rotation corresponds to  $2\pi$  radians.  
Hence, a third of a full rotation equals  $\frac{2\pi}{3}$  radians.

# Converting Radians to Degrees

- Convert each radian measure to degrees.

(a)  $\frac{\pi}{6}$

(b) 3

- (a) Find the fraction of the circle represented:

$$\frac{\frac{\pi}{6}}{2\pi} = \frac{1}{12}.$$

Then find how much in degrees is  $\frac{1}{12}$ th of the circle:

$$\frac{1}{12} \cdot 360^\circ = 30^\circ.$$

- (b) Same process:

$$\frac{3}{2\pi} \cdot 360^\circ = \left(\frac{540}{\pi}\right)^\circ.$$



# Converting Degrees to Radians

- Convert 15 degrees to radians.

Find the fraction of the circle represented:

$$\frac{15^\circ}{360^\circ} = \frac{1}{24}.$$

Then find how much in radians is  $\frac{1}{24}$ th of the circle:

$$\frac{1}{24} \cdot 2\pi = \frac{\pi}{12}.$$

# Coterminal and Reference Angles

- **Coterminal angles** are two angles in standard position that have the same terminal side.
- An angle's **reference angle** is the size of the smallest acute angle,  $t'$ , formed by the terminal side of the angle  $t$  and the horizontal axis.

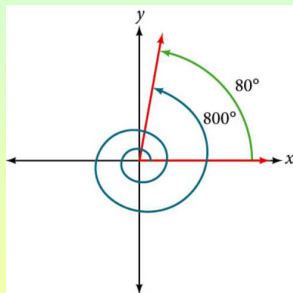
# Finding an Angle Coterminal with an Angle $> 360^\circ$

- Find the least positive angle  $\theta$  that is coterminal with an angle measuring  $800^\circ$ , where  $0^\circ \leq \theta < 360^\circ$ .

Find how many times 360 goes into 800: 2 times.

Subtract these many multiples of 360 from 800:

$$800^\circ - 2 \cdot 360^\circ = 80^\circ.$$

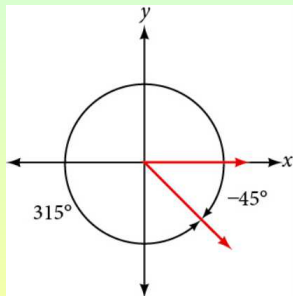


# Finding an Angle Coterminal with an Angle $< 0^\circ$

- Show the angle with measure  $-45^\circ$  on a circle and find a positive coterminal angle  $\alpha$  such that  $0^\circ \leq \alpha < 360^\circ$ .

Add as many multiples of 360 as needed to get an angle between  $0^\circ$  and  $360^\circ$ .

$$-45^\circ + 360^\circ = 315^\circ.$$



# Finding Coterminal Angles Using Radians

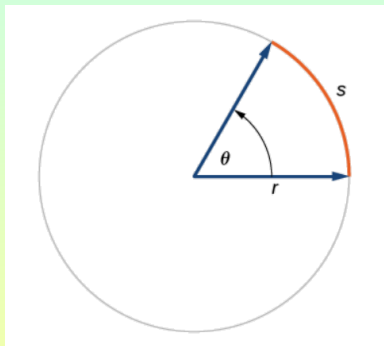
- Find an angle  $\beta$  that is coterminal with  $\frac{19\pi}{4}$ , where  $0 \leq \beta < 2\pi$ .  
Find how many times  $2\pi$  goes into  $\frac{19\pi}{4}$ :  
2 times.

Subtract this many multiples of  $2\pi$  from  $\frac{19\pi}{4}$ :

$$\frac{19\pi}{4} - 2 \cdot 2\pi = \frac{19\pi}{4} - \frac{16\pi}{4} = \frac{3\pi}{4}.$$

# Finding the Length of an Arc

- In a circle of radius  $r$ , the length of an arc  $s$  subtended by an angle with measure  $\theta$  in radians, shown in



is

$$s = r\theta.$$

**Careful:** When using this equation,  $\theta$  must be in radians!

# Finding the Length of an Arc

- Find the arc length along a circle of radius 10 units subtended by an angle of  $215^\circ$ .

First convert the measure of the angle to radians:

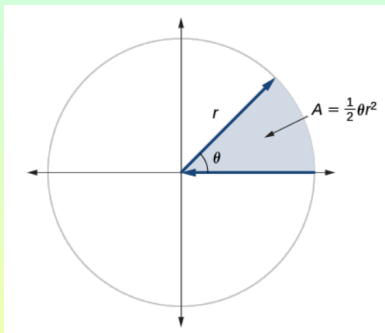
$$\frac{215^\circ}{360^\circ} \cdot 2\pi = \frac{43\pi}{36}.$$

Then use

$$s = r\theta = 10 \cdot \frac{43\pi}{36} = \frac{430\pi}{36} = \frac{215\pi}{18} \text{ units.}$$

# Area of a Sector

- The area of a sector of a circle with radius  $r$  subtended by an angle  $\theta$ , measured in radians,



is

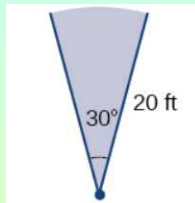
$$A = \frac{1}{2}\theta r^2.$$

**Careful:** When using this equation,  $\theta$  must be in radians!



# Finding the Area of a Sector

- An automatic lawn sprinkler sprays a distance of 20 feet while rotating 30 degrees. What is the area of the sector of grass the sprinkler waters?



Convert degrees to radians:

$$\frac{30^\circ}{360^\circ} \cdot 2\pi = \frac{\pi}{6}.$$

Now we get

$$A = \frac{1}{2}\theta r^2 = \frac{1}{2} \cdot \frac{\pi}{6} \cdot 20^2 = \frac{400\pi}{12} = \frac{100\pi}{3} \text{ feet}^2.$$

# Angular Speed and Linear Speed

- **Angular Speed:**

$$\omega = \frac{\theta}{t}.$$

- **Linear Speed:**

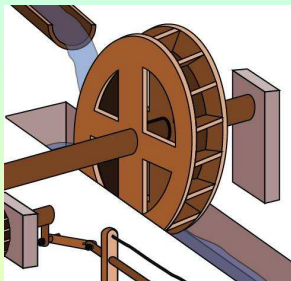
$$v = \frac{s}{t}.$$

- Recall that  $s = r\theta$ .
- So we get

$$v = \frac{s}{t} = \frac{r\theta}{t} = r \cdot \frac{\theta}{t} = r\omega.$$

# Finding Angular Speed

- A water wheel completes 1 rotation every 5 seconds. Find the angular speed in radians per second.



The wheel turns  $2\pi$  radians in 5 seconds.

So we get

$$\omega = \frac{\theta}{t} = \frac{2\pi}{5} \text{ radians/second.}$$

## Finding a Linear Speed

- A bicycle has wheels 28 inches in diameter. A tachometer determines the wheels are rotating at 180 RPM (revolutions per minute). Find the speed the bicycle is traveling down the road.

First compute the angular speed of the wheel:

$$\omega = \frac{\theta}{t} = \frac{180 \cdot 2\pi \text{ rad}}{1 \text{ min}} = 360\pi \text{ rad/min.}$$

Now compute the linear speed:

$$v = r\omega = 14 \text{ in} \cdot 360\pi \text{ rad/min} = 5040\pi \text{ in/min.}$$

## Subsection 2

# Right Triangle Trigonometry

# Trigonometric Functions in a Right Triangle

- The six trigonometric functions are defined as follows:

$$\sin t = \frac{\text{opposite}}{\text{hypotenuse}}$$

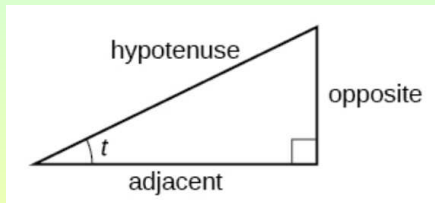
$$\cos t = \frac{\text{adjacent}}{\text{hypotenuse}}$$

$$\tan t = \frac{\text{opposite}}{\text{adjacent}}$$

$$\csc t = \frac{\text{hypotenuse}}{\text{opposite}}$$

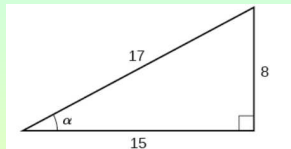
$$\sec t = \frac{\text{hypotenuse}}{\text{adjacent}}$$

$$\cot t = \frac{\text{adjacent}}{\text{opposite}}$$



# Evaluating a Trigonometric Function of a Right Triangle

- Given the triangle shown, find the value of  $\cos \alpha$ .

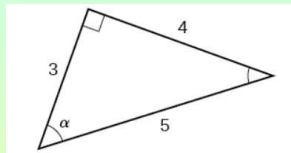


We have by definition

$$\cos \alpha = \frac{\text{adjacent}}{\text{hypotenuse}} = \frac{15}{17}.$$

# Evaluating Trigonometric Functions of Angles

- Using the triangle shown, evaluate  $\sin \alpha$ ,  $\cos \alpha$ ,  $\tan \alpha$ ,  $\sec \alpha$ ,  $\csc \alpha$  and  $\cot \alpha$ .



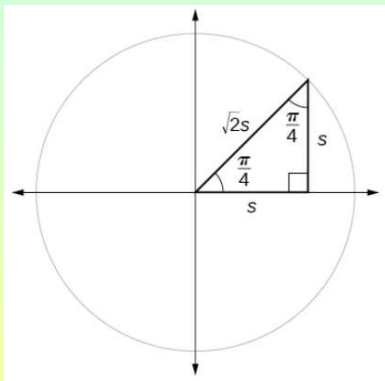
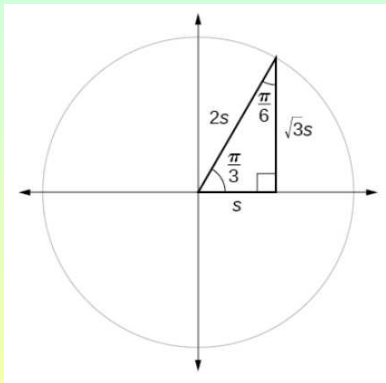
We use again the definitions:

$$\sin \alpha = \frac{4}{5}, \quad \cos \alpha = \frac{3}{5}, \quad \tan \alpha = \frac{4}{3},$$

$$\sec \alpha = \frac{5}{3}, \quad \csc \alpha = \frac{5}{4}, \quad \cot \alpha = \frac{3}{4}.$$



# Right Triangles With Special Angles



# Evaluating Trigonometric Functions of Special Angles

- Find the exact value of the trigonometric functions of  $\frac{\pi}{3}$  using side lengths.

Recall the right triangle configuration.

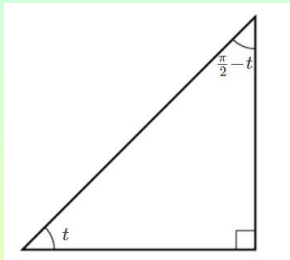
We have

$$\sin \frac{\pi}{3} = \frac{\sqrt{3}s}{2s} = \frac{\sqrt{3}}{2}, \quad \cos \frac{\pi}{3} = \frac{s}{2s} = \frac{1}{2}, \quad \tan \frac{\pi}{3} = \frac{\sqrt{3}s}{s} = \sqrt{3},$$

$$\csc \frac{\pi}{3} = \frac{2s}{\sqrt{3}s} = \frac{2\sqrt{3}}{3}, \quad \sec \frac{\pi}{3} = \frac{2s}{s} = 2, \quad \cot \frac{\pi}{3} = \frac{s}{\sqrt{3}s} = \frac{\sqrt{3}}{3}.$$

# Cofunction Identities

- The cofunction identities in radians:



$$\cos t = \sin\left(\frac{\pi}{2} - t\right), \quad \sin t = \cos\left(\frac{\pi}{2} - t\right),$$

$$\tan t = \cot\left(\frac{\pi}{2} - t\right), \quad \cot t = \tan\left(\frac{\pi}{2} - t\right),$$

$$\sec t = \csc\left(\frac{\pi}{2} - t\right), \quad \csc t = \sec\left(\frac{\pi}{2} - t\right).$$

# Using Cofunction Identities

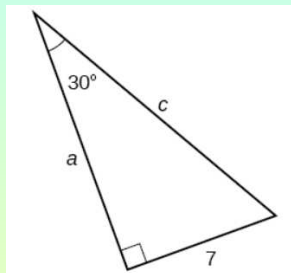
- If  $\sin t = \frac{5}{12}$ , find  $\cos\left(\frac{\pi}{2} - t\right)$ .

We get

$$\cos\left(\frac{\pi}{2} - t\right) = \sin t = \frac{5}{12}.$$

# Finding Missing Side Lengths Using Trigonometric Ratios

- Find the unknown sides of the triangle.



We get

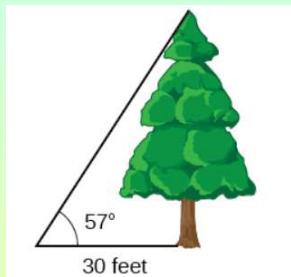
$$\sin 30^\circ = \frac{7}{c} \Rightarrow \frac{1}{2} = \frac{7}{c} \Rightarrow c = 14.$$

Moreover,

$$\cos 30^\circ = \frac{a}{c} \Rightarrow \frac{\sqrt{3}}{2} = \frac{a}{14} \Rightarrow a = 7\sqrt{3}.$$

# Measuring a Distance Indirectly

- To find the height of a tree, a person walks to a point 30 feet from the base of the tree. She measures an *angle of elevation* between a line of sight to the top of the tree and the ground, as shown in the figure. Find the height of the tree.



We get

$$\tan(57^\circ) = \frac{h}{30} \Rightarrow h = 30 \tan(57^\circ) \Rightarrow h \approx 46.2 \text{ feet.}$$

## Subsection 3

### Unit Circle

# Finding Function Values for Sine and Cosine

- Point  $P$  is a point on the unit circle corresponding to an angle of  $t$ , as shown in the figure. Find  $\cos(t)$  and  $\sin(t)$ .

Recall that  $\cos t = \frac{\text{adjacent}}{\text{hypotenuse}}$ .

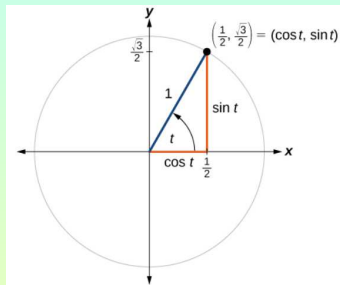
But on the unit circle, hypotenuse = 1.

So

$$\cos t = \frac{x}{1} = x = \frac{1}{2}.$$

Similarly,

$$\sin t = y = \frac{\sqrt{3}}{2}.$$

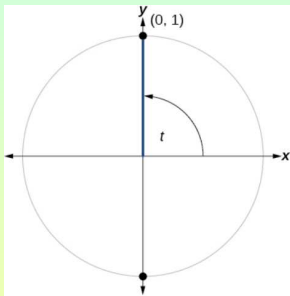




# Calculating Sines and Cosines along an Axis

- Find  $\cos(90^\circ)$  and  $\sin(90^\circ)$ .

Draw the angle on the unit circle.



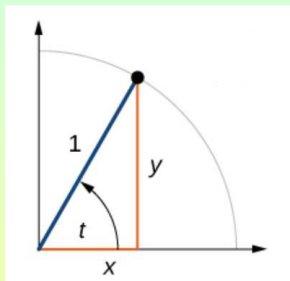
Then we have

$$\cos(90^\circ) = x = 0 \quad \text{and} \quad \sin(90^\circ) = y = 1.$$

# The Pythagorean Identity

- The **Pythagorean Identity** states that, for any real number  $t$ ,

$$\cos^2 t + \sin^2 t = 1.$$



Looking at the figure,

$$\cos^2 t + \sin^2 t = x^2 + y^2 = 1.$$

# Finding a Cosine from a Sine or a Sine from a Cosine

- If  $\sin(t) = \frac{3}{7}$  and  $t$  is in the second quadrant, find  $\cos(t)$ .

By the Pythagorean Identity,

$$\sin^2 t + \cos^2 t = 1$$

$$\frac{9}{49} + \cos^2 t = 1$$

$$\cos^2 t = 1 - \frac{9}{49} = \frac{40}{49}$$

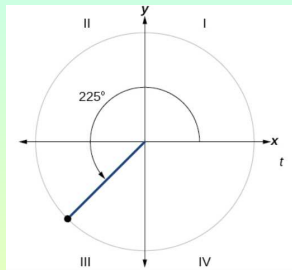
$$\cos t = \pm \sqrt{\frac{40}{49}} = \pm \frac{2\sqrt{10}}{7}.$$

Since  $\frac{\pi}{2} < t < \pi$ ,  $\cos t < 0$ .

Therefore,  $\cos t = -\frac{2\sqrt{10}}{7}$ .

# Finding a Reference Angle

- Find the reference angle of  $225^\circ$ .



Recall that an angle  $t$ 's *reference angle* is the size of the smallest acute angle,  $t'$ , formed by the terminal side of the angle  $t$  and the horizontal axis.

So we have

$$225^\circ - 180^\circ = 45^\circ.$$

# Using Reference Angles to Find Sine and Cosine

- Using a reference angle, find the exact value of  $\cos(150^\circ)$  and  $\sin(150^\circ)$ .

The angle  $150^\circ$  has reference angle  $30^\circ$ .

So we get

$$\sin(150^\circ) = \pm \sin(30^\circ) = \pm \frac{1}{2},$$

$$\cos(150^\circ) = \pm \cos(30^\circ) = \pm \frac{\sqrt{3}}{2}.$$

Since  $90^\circ < 150^\circ < 180^\circ$ ,

$$\sin(150^\circ) = +\frac{1}{2} \quad \text{and} \quad \cos(150^\circ) = -\frac{\sqrt{3}}{2}.$$

# Using Reference Angles to Find Sine and Cosine

- Using the reference angle, find  $\cos \frac{5\pi}{4}$ . and  $\sin \frac{5\pi}{4}$ .

The angle  $\frac{5\pi}{4}$  has reference angle  $\frac{\pi}{4}$ .

So we get

$$\sin \frac{5\pi}{4} = \pm \sin \frac{\pi}{4} = \pm \frac{\sqrt{2}}{2},$$

$$\cos \frac{5\pi}{4} = \pm \cos \frac{\pi}{4} = \pm \frac{\sqrt{2}}{2}.$$

Since  $\pi < \frac{5\pi}{4} < \frac{3\pi}{2}$ ,

$$\sin \frac{5\pi}{4} = -\frac{\sqrt{2}}{2} \quad \text{and} \quad \cos \frac{5\pi}{4} = -\frac{\sqrt{2}}{2}.$$

# Using the Unit Circle to Find Coordinates

- Find the coordinates of the point on the unit circle at an angle of  $\frac{7\pi}{6}$ .  
Since the point is on the unit circle,

$$\begin{aligned}(x, y) &= (\cos t, \sin t) \\ &= \left(\cos \frac{7\pi}{6}, \sin \frac{7\pi}{6}\right) \\ &= \left(-\cos \frac{\pi}{6}, -\sin \frac{\pi}{6}\right) \\ &= \left(-\frac{\sqrt{3}}{2}, -\frac{1}{2}\right).\end{aligned}$$

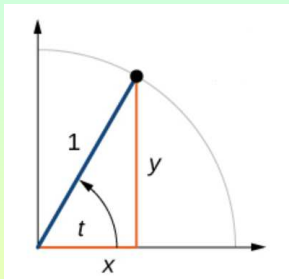
## Subsection 4

# The Other Trigonometric Functions



# The Trigonometric Functions on the Unit Circle

- On the unit circle

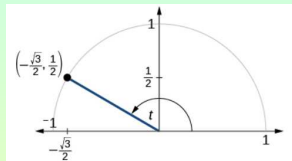


$$\sin t = y, \quad \cos t = x, \quad \tan t = \frac{y}{x},$$

$$\sec t = \frac{1}{x}, \quad \csc t = \frac{1}{y}, \quad \cot t = \frac{x}{y}.$$

# Finding Trigonometric Functions from a Point

- The point  $(-\frac{\sqrt{3}}{2}, \frac{1}{2})$  is on the unit circle, as shown. Find  $\sin t$ ,  $\cos t$ ,  $\tan t$ ,  $\sec t$ ,  $\csc t$  and  $\cot t$ .



We have

$$\sin t = \frac{1}{2}, \quad \cos t = -\frac{\sqrt{3}}{2}, \quad \tan t = -\frac{\sqrt{3}}{3},$$

$$\sec t = -\frac{2\sqrt{3}}{3}, \quad \csc t = 2, \quad \cot t = -\sqrt{3}.$$

# Finding the Trigonometric Functions of an Angle

- Find  $\sin t$ ,  $\cos t$ ,  $\tan t$ ,  $\sec t$ ,  $\csc t$  and  $\cot t$ , when  $t = \frac{\pi}{6}$ .

We have

$$\sin \frac{\pi}{6} = \frac{1}{2}, \quad \cos \frac{\pi}{6} = \frac{\sqrt{3}}{2}, \quad \tan \frac{\pi}{6} = \frac{\sqrt{3}}{3},$$

$$\sec \frac{\pi}{6} = \frac{2\sqrt{3}}{3}, \quad \csc \frac{\pi}{6} = 2, \quad \cot \frac{\pi}{6} = \sqrt{3}.$$

# Using Reference Angles to Find Trigonometric Functions

- Use reference angles to find all six trigonometric functions of  $-\frac{5\pi}{6}$ .

The reference angle of  $-\frac{5\pi}{6}$  is  $\frac{\pi}{6}$ .

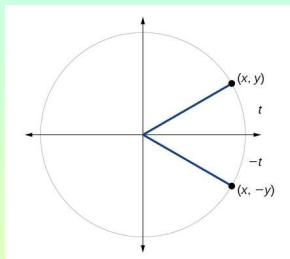
Moreover  $-\frac{5\pi}{6}$  is in Quadrant III.

So we get:

$$\sin\left(-\frac{5\pi}{6}\right) = -\frac{1}{2}, \quad \cos\left(-\frac{5\pi}{6}\right) = -\frac{\sqrt{3}}{2}, \quad \tan\left(-\frac{5\pi}{6}\right) = \frac{\sqrt{3}}{3},$$

$$\sec\left(-\frac{5\pi}{6}\right) = -\frac{2\sqrt{3}}{3}, \quad \csc\left(-\frac{5\pi}{6}\right) = -2, \quad \cot\left(-\frac{5\pi}{6}\right) = \sqrt{3}.$$

# Even and Odd Trigonometric Functions



- From the figure we can tell that

$$\sin(-t) = -\sin t, \quad \cos(-t) = \cos t, \quad \tan(-t) = -\tan t,$$

$$\sec(-t) = \sec t, \quad \csc(-t) = -\csc t, \quad \cot(-t) = -\cot t.$$

- So  $\cos t$  and  $\sec t$  are the only even trig functions.

# Using Even and Odd Properties of Trigonometric Functions

- If the secant of angle  $t$  is 2, what is the secant of  $-t$ ?

Since  $\sec t$  is even,

$$\sec(-t) = \sec t = 2.$$

# Fundamental Identities

$$\tan t = \frac{\sin t}{\cos t}$$

$$\sec t = \frac{1}{\cos t}$$

$$\csc t = \frac{1}{\sin t}$$

$$\cot t = \frac{1}{\tan t} = \frac{\cos t}{\sin t}.$$

# Using Identities to Evaluate Trigonometric Functions

- Given  $\sin(45^\circ) = \frac{\sqrt{2}}{2}$ ,  $\cos(45^\circ) = \frac{\sqrt{2}}{2}$ , evaluate  $\tan(45^\circ)$ .

$$\tan(45^\circ) = \frac{\sin(45^\circ)}{\cos(45^\circ)} = \frac{\frac{\sqrt{2}}{2}}{\frac{\sqrt{2}}{2}} = 1.$$

- Given  $\sin\left(\frac{5\pi}{6}\right) = \frac{1}{2}$ ,  $\cos\left(\frac{5\pi}{6}\right) = -\frac{\sqrt{3}}{2}$ , evaluate  $\sec\left(\frac{5\pi}{6}\right)$ .

$$\sec\left(\frac{5\pi}{6}\right) = \frac{1}{\cos\left(\frac{5\pi}{6}\right)} = \frac{1}{-\frac{\sqrt{3}}{2}} = -\frac{2\sqrt{3}}{3}.$$



# Using Identities to Simplify Trigonometric Expressions

- Simplify  $\frac{\sec t}{\tan t}$ .

$$\begin{aligned}\frac{\sec t}{\tan t} &= \frac{\frac{1}{\cos t}}{\frac{\sin t}{\cos t}} \\ &= \frac{1}{\cos t} \frac{\cos t}{\sin t} \\ &= \frac{1}{\sin t} \\ &= \csc t.\end{aligned}$$

# Alternate Forms of the Pythagorean Identity

$$1 + \tan^2 t = \sec^2 t$$

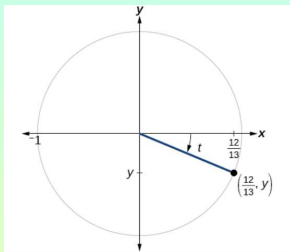
$$\cot^2 t + 1 = \csc^2 t.$$

- Let us see why the first holds:

$$\begin{aligned} 1 + \tan^2 t &= 1 + \frac{\sin^2 t}{\cos^2 t} \\ &= \frac{\cos^2 t}{\cos^2 t} + \frac{\sin^2 t}{\cos^2 t} \\ &= \frac{\cos^2 t + \sin^2 t}{\cos^2 t} \\ &= \frac{1}{\cos^2 t} \\ &= \sec^2 t. \end{aligned}$$

# Using Identities to Relate Trigonometric Functions

- If  $\cos(t) = \frac{12}{13}$  and  $t$  is in quadrant IV, as shown, find the values of the other five trigonometric functions.



By the Pythagorean Identity  $\sin^2 t + \cos^2 t = 1$ , we get

$$\sin t = -\sqrt{1 - \cos^2 t} = -\sqrt{1 - \frac{144}{169}} = -\sqrt{\frac{25}{169}} = -\frac{5}{13}.$$

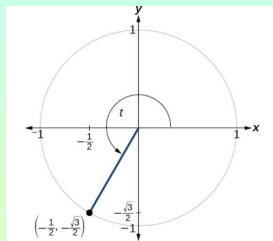
All other trigonometric functions are now easy to compute:

$$\tan t = \frac{\sin t}{\cos t} = \frac{-\frac{5}{13}}{\frac{12}{13}} = -\frac{5}{12}, \quad \sec t = \frac{1}{\cos t} = \frac{1}{\frac{12}{13}} = \frac{13}{12},$$

$$\csc t = \frac{1}{\sin t} = \frac{1}{-\frac{5}{13}} = -\frac{13}{5}, \quad \cot t = \frac{1}{\tan t} = \frac{1}{-\frac{5}{12}} = -\frac{12}{5}.$$

# Finding the Values of Trigonometric Functions

- Find the values of the six trigonometric functions of angle  $t$  based on the figure.



The sine and cosine can be determined by the figure:

$$\sin t = -\frac{\sqrt{3}}{2} \quad \text{and} \quad \cos t = -\frac{1}{2}.$$

The other numbers follow easily:

$$\tan t = \frac{\sin t}{\cos t} = \frac{-\frac{\sqrt{3}}{2}}{-\frac{1}{2}} = \sqrt{3}, \quad \sec t = \frac{1}{\cos t} = \frac{1}{-\frac{1}{2}} = -2,$$

$$\csc t = \frac{1}{\sin t} = \frac{1}{-\frac{\sqrt{3}}{2}} = -\frac{2\sqrt{3}}{3}, \quad \cot t = \frac{1}{\tan t} = \frac{1}{\sqrt{3}} = \frac{\sqrt{3}}{3}.$$

# Finding the Value of Trigonometric Functions

- If  $\sin(t) = -\frac{\sqrt{3}}{2}$  and  $\cos(t) = \frac{1}{2}$ , find  $\sec(t)$ ,  $\csc(t)$ ,  $\tan(t)$ ,  $\cot(t)$ .

We get

$$\sec t = \frac{1}{\cos t} = \frac{1}{\frac{1}{2}} = 2,$$

$$\csc t = \frac{1}{\sin t} = \frac{1}{-\frac{\sqrt{3}}{2}} = -\frac{2\sqrt{3}}{3},$$

$$\tan t = \frac{\sin t}{\cos t} = \frac{-\frac{\sqrt{3}}{2}}{\frac{1}{2}} = -\sqrt{3},$$

$$\cot t = \frac{1}{\tan t} = \frac{1}{-\sqrt{3}} = -\frac{\sqrt{3}}{3}.$$